




# MathConceptition

2023

# K3

# Question Booklet

# 問題簿



限時：30 分鐘

不允許使用計算機。

比賽須知：

1. 未宣布開始前，切勿翻閱此問題簿。
2. 請核對標籤貼紙上列出的資料是否與你相符。如有問題，請舉手。
3. 問題簿內所有題目均為多項選擇題，你需於每題選出一個答案，並用鉛筆圈出。
4. 比賽完結時監考員會收回桌上的草稿紙，但草稿紙上所書寫的任何文字或圖表將不獲評閱。
5. 此問題簿的附圖不一定依比例繪成。

Time: 30 minutes

Calculators are NOT permitted.

Instructions:

1. **DO NOT OPEN THIS QUESTION BOOKLET UNTIL YOU ARE TOLD TO DO SO.**
2. **If your information on the pre-printed label is not correct, please inform the invigilator immediately.**
3. **For each question, you will be asked to choose one option from the list. Use a pencil to circle ONE answer only.**
4. **Rough-work sheets provided will be collected at the end of the contest but they will not be marked.**
5. **Diagrams in this question booklet are not necessarily drawn to scale.**

1)  $3 + 6$  是多少? [3.8%]

What is  $3 + 6$ ?

A) 5

B) 6

C) 7

D) 8

E) 9

---

2)  $5 - 2$  是多少? [3.9%]

What is  $5 - 2$ ?

A) 2

B) 3

C) 4


D) 5

E) 6

3) 數一數水果的數目。

[4%]

Count the number of fruit(s).



A) 1

B) 2

C) 3

D) 4

E) 5

F) 6

4) 哪一個數比 12 少 5 ?

[4.1%]

Which number is smaller than 12 by 5?

A) 5

B) 6

C) 7

D) 8

E) 9

F) 17

- 5) 從 27 開始倒數，下一個數字是多少？ [4.2%]

Count backwards from 27, what is the next number?

- A) 21                      B) 22                      C) 25  
D) 26                      E) 27                      F) 28
- 

- 6) 根據規律，找出橫線上的數字。 [4.3%]

Find the missing number.

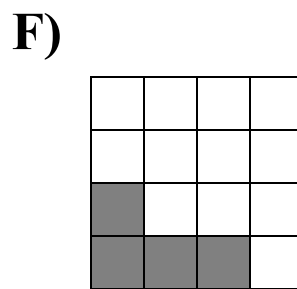
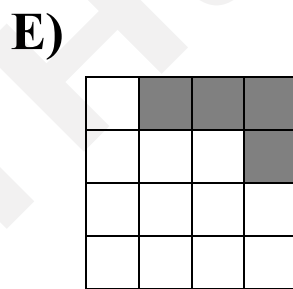
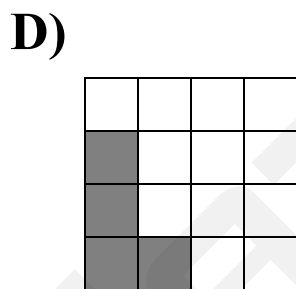
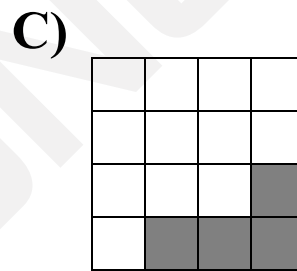
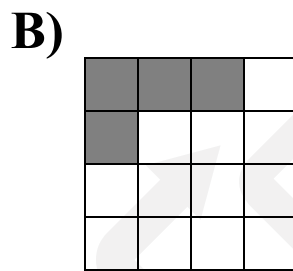
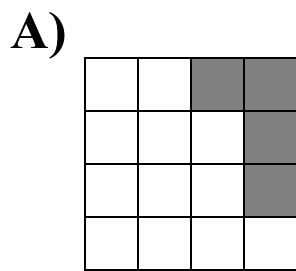
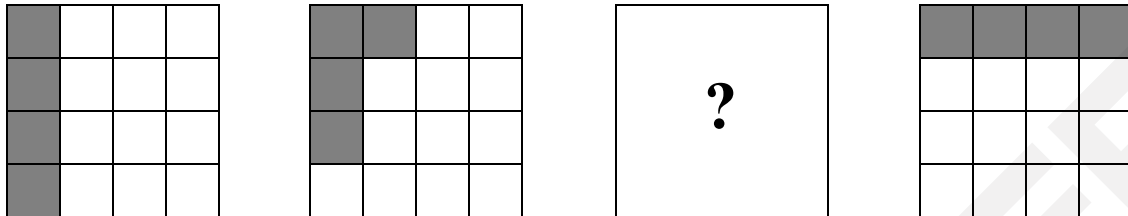
2, 9, 16, 23, 30, ?, 44, 51, ...

- A) 31                      B) 33                      C) 35  
D) 37                      E) 39                      F) 41

7) 根據規律，找出缺掉的圖案。

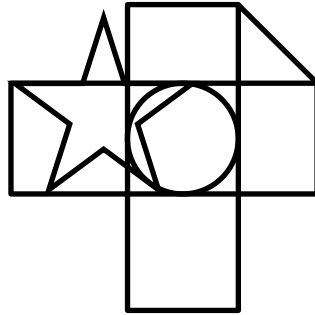
[4.4%]

Find the missing figure.



- 8) 以下哪一個圖形沒有在圖中出現？ [4.5%]

Which shape is not in the picture below?



A)




B)



C)



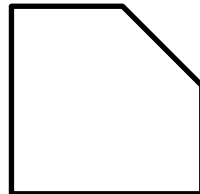
D)



E)



F)



- 9) 小耀有 15 粒朱古力。他每天吃 3 粒朱古力。 [4.6%]  
小耀需要多少天才能吃掉所有朱古力？

Thomas has 15 chocolates. If he eats 3 chocolates every day, how many days does it take to finish all chocolates?

A) 4

B) 5

C) 6

D) 7

E) 8

F) 9

10) 哪一個數字最小？

[4.7%]

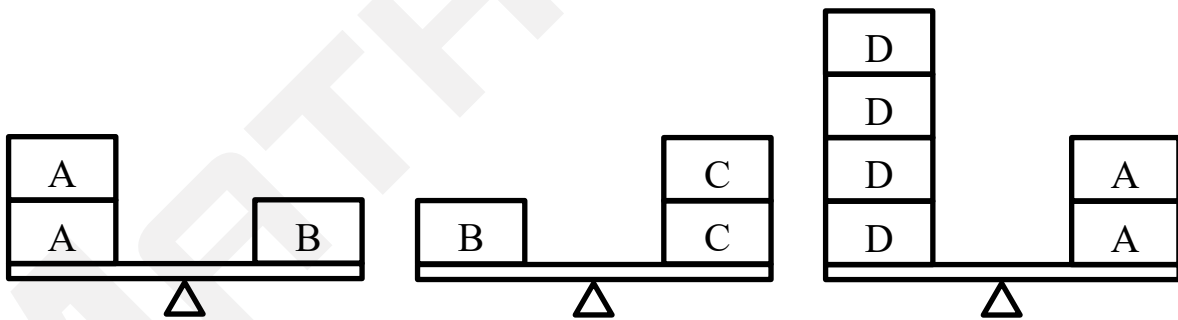
Which number is the smallest?

- A) 202303      B) 202403      C) 202324  
 D) 202424      E) 202323      F) 202423

11) 一個 C 等於多少個 D 的重量？

[4.8%]

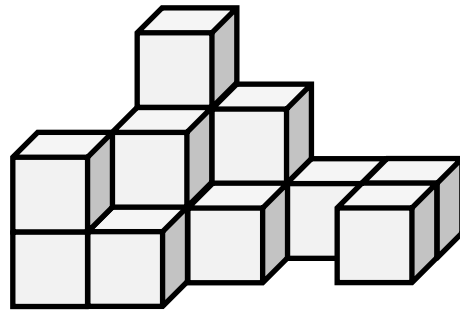
How many D's are as heavy as a C?



- A) 1      B) 2      C) 3  
 D) 4      E) 5      F) 6

12) 要砌出以下立體最少需要  多少粒？ [4.9%]

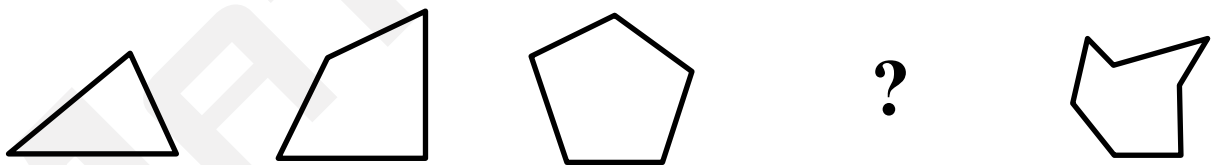
At least how many  are needed to build the solid below?



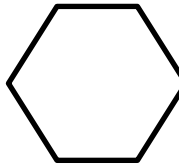

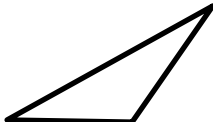



- A) 9                      B) 10                      C) 11  
D) 12                      E) 13                      F) 14

13) 根據規律，找出缺掉的圖案。 [5%]

Find the missing shape.



- A)                       B)                       C)   
D)                       E)                       F) 



- 14) 小強在排隊買炸雞，已知 4 人排在他身後， [5.1%]  
7 人排在他前面。3 人離開隊伍後，現在一共  
有多少人正在排隊？

Bobby is queuing for fried chickens. There are  
4 people behind him and 7 people in front of him.  
3 people have just left, how many people are there in  
the queue now?

- A) 7                      B) 8                      C) 9  
D) 10                     E) 11                     F) 12

- 
- 15) 今天是星期日。12 天後是星期幾？ [5.2%]


Today is Sunday. Which day of the week is it after  
12 days?

- A) 星期一                B) 星期二                C) 星期三  
Monday                      Tuesday                      Wednesday  
D) 星期四                E) 星期五                F) 星期六  
Thursday                      Friday                      Saturday

16) 下圖中共有多少個正方形？

[6.3%]

How many squares are there in the figure below?



A) 6

B) 7

C) 8

D) 9

E) 10

F) 11

17) 依次序填寫「+」、「-」或數字，使算式成立。 [6.4%]

Fill in “+”, “-” or a number in each box in a correct order to make the calculation valid.

$$11 \quad \boxed{?} \quad 8 \quad \boxed{?} \quad 4 \quad = \quad 7$$

A) +, +

B) +, -

C) -, +

D) -, -

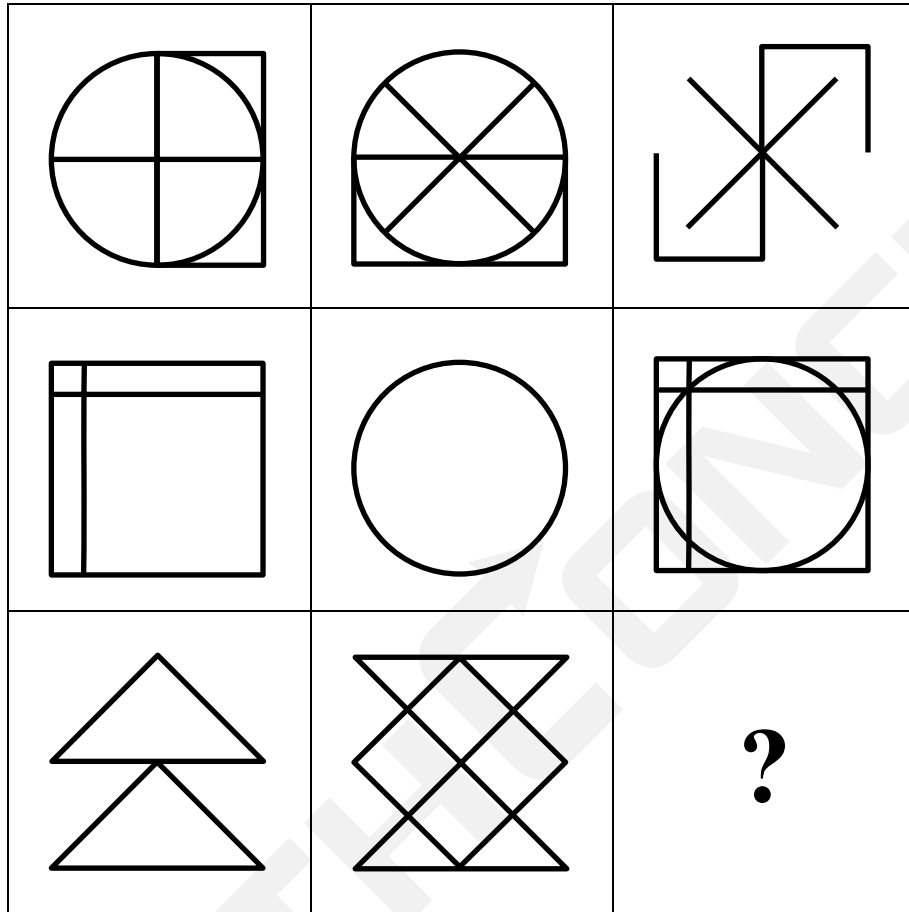
E) 2, -

F) +, 0


18) 找出缺掉的圖案。

[6.5%]

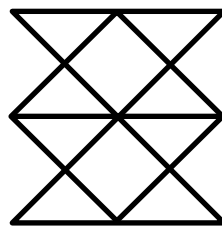
Find the missing figure.




A)



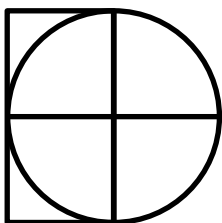
B)



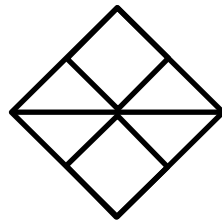
C)



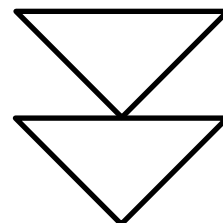
D)



E)



F)



- 19) 小明在 2020 年 2 月 25 日出發去旅行，並在 [6.6%]  
2020 年 3 月 2 日回家。包括出發日及回程日，  
小明共去了旅行多少天？

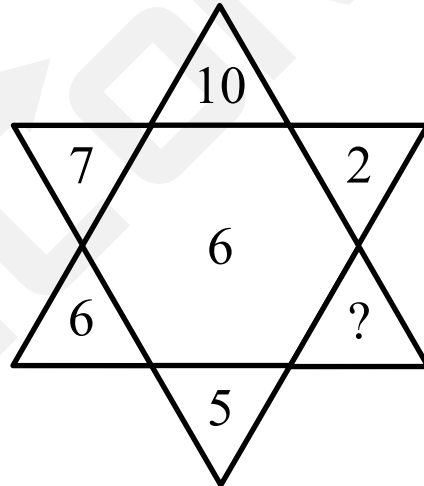
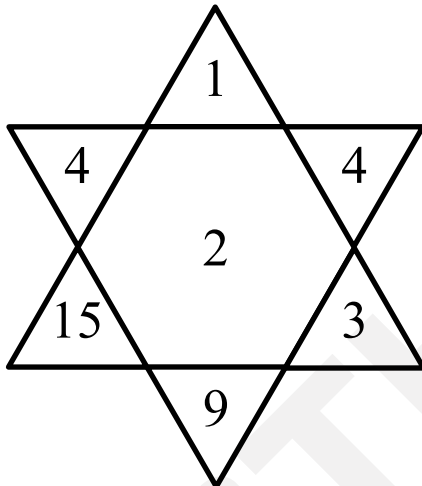
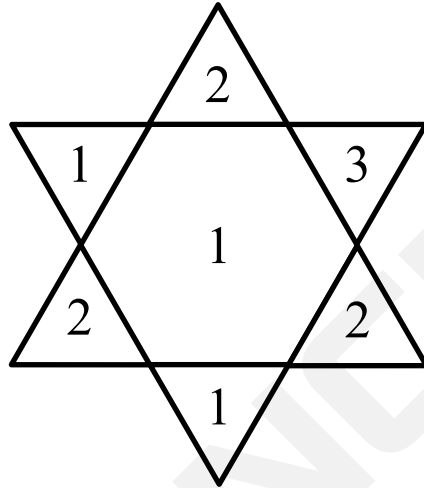
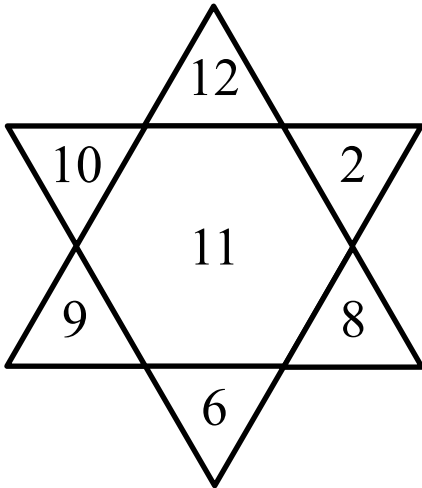
Tom goes travelling on 25<sup>th</sup> February 2020 and returns home on 2<sup>nd</sup> March 2020. How many days does he travel, including the departure and arrival day?

- A) 3                      B) 4                      C) 5  
D) 6                      E) 7                      F) 8  
G) 9                      H) 10                      I) 11

20) 解以下謎題。

[6.7%]

Solve the following puzzle.



A) 2

B) 3

C) 4

D) 5

E) 6

F) 7

G) 8

H) 9

I) 10

全卷完  
End of paper

空白頁  
Blank page

空白頁  
Blank page

空白頁  
Blank page



# MathConceptition 2023

K3

1. E

2. B

3. D

4. C

5. D

6. D

7. B

8. E

9. B

10. A

11. B

12. F

13. C

14. C

15. E

16. C

17. C

18. F

19. E

20. C